

Visual Division

Name: _____

Date: _____


Count the groups and the objects in each box, then write the answer — Division with Shapes (up to 30)



$6 \div 3 = \underline{\quad}$




$10 \div 2 = \underline{\quad}$



$12 \div 3 = \underline{\quad}$



$14 \div 7 = \underline{\quad}$




$15 \div 3 = \underline{\quad}$



$18 \div 9 = \underline{\quad}$



$20 \div 2 = \underline{\quad}$



$20 \div 5 = \underline{\quad}$




$21 \div 3 = \underline{\quad}$



$24 \div 12 = \underline{\quad}$



$25 \div 5 = \underline{\quad}$



$26 \div 2 = \underline{\quad}$