


# Visual Division

Name: \_\_\_\_\_

Date: \_\_\_\_\_

Count the groups and the objects in each box, then write the answer — Division with Shapes (up to 30)



$6 \div 3 = \underline{\quad}$



$9 \div 3 = \underline{\quad}$




$10 \div 5 = \underline{\quad}$



$14 \div 7 = \underline{\quad}$



$20 \div 2 = \underline{\quad}$




$20 \div 4 = \underline{\quad}$




$22 \div 2 = \underline{\quad}$



$22 \div 11 = \underline{\quad}$




$26 \div 2 = \underline{\quad}$



$27 \div 3 = \underline{\quad}$



$27 \div 9 = \underline{\quad}$



$28 \div 4 = \underline{\quad}$

