

# Visual Division

Name: \_\_\_\_\_

Date: \_\_\_\_\_


Count the groups and the objects in each box, then write the answer — Division with Shapes (up to 40)



$6 \div 2 = \underline{\quad}$



$18 \div 9 = \underline{\quad}$



$20 \div 5 = \underline{\quad}$




$24 \div 2 = \underline{\quad}$



$24 \div 3 = \underline{\quad}$




$35 \div 5 = \underline{\quad}$



$35 \div 7 = \underline{\quad}$



$39 \div 13 = \underline{\quad}$



$40 \div 2 = \underline{\quad}$