

Visual Division


Name: _____

Date: _____


Count the groups and the objects in each box, then write the answer — Division with Shapes (up to 40)




$15 \div 3 = \underline{\quad}$



$28 \div 2 = \underline{\quad}$



$28 \div 7 = \underline{\quad}$



$30 \div 5 = \underline{\quad}$




$30 \div 10 = \underline{\quad}$



$30 \div 15 = \underline{\quad}$



$33 \div 11 = \underline{\quad}$



$34 \div 2 = \underline{\quad}$



$39 \div 13 = \underline{\quad}$