


Visual Division

Name: _____

Date: _____


Count the groups and the objects in each box, then write the answer — Division with Shapes (up to 40)



$8 \div 4 = \underline{\quad}$



$9 \div 3 = \underline{\quad}$




$12 \div 2 = \underline{\quad}$



$16 \div 4 = \underline{\quad}$



$18 \div 2 = \underline{\quad}$




$18 \div 3 = \underline{\quad}$



$22 \div 11 = \underline{\quad}$



$30 \div 6 = \underline{\quad}$



$40 \div 8 = \underline{\quad}$