

# Visual Division


Name: \_\_\_\_\_

Date: \_\_\_\_\_

Count the groups and the objects in each box, then write the answer — Division with Shapes (up to 50)




$10 \div 2 = \underline{\quad}$




$24 \div 12 = \underline{\quad}$




$26 \div 2 = \underline{\quad}$




$28 \div 2 = \underline{\quad}$



$28 \div 4 = \underline{\quad}$



$30 \div 5 = \underline{\quad}$



$34 \div 2 = \underline{\quad}$



$40 \div 20 = \underline{\quad}$



$48 \div 24 = \underline{\quad}$