

Visual Division

Name: _____

Date: _____


Count the groups and the objects in each box, then write the answer — Division with Shapes (up to 50)




$6 \div 2 = \underline{\quad}$



$24 \div 4 = \underline{\quad}$



$35 \div 5 = \underline{\quad}$




$36 \div 3 = \underline{\quad}$




$36 \div 9 = \underline{\quad}$



$40 \div 4 = \underline{\quad}$



$42 \div 6 = \underline{\quad}$



$45 \div 3 = \underline{\quad}$



$48 \div 6 = \underline{\quad}$