

Visual Division


Name: _____

Date: _____

Count the groups and the objects in each box, then write the answer — Division with Shapes (up to 50)




$12 \div 6 = \underline{\quad}$




$14 \div 7 = \underline{\quad}$



$20 \div 5 = \underline{\quad}$



$25 \div 5 = \underline{\quad}$



$28 \div 14 = \underline{\quad}$




$30 \div 5 = \underline{\quad}$



$30 \div 15 = \underline{\quad}$



$36 \div 12 = \underline{\quad}$



$42 \div 6 = \underline{\quad}$