


# Fraction of a Whole

Name: \_\_\_\_\_

Date: \_\_\_\_\_

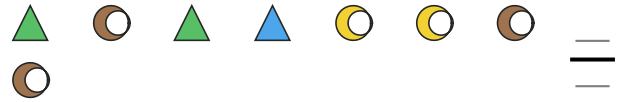
Write the fraction of the set that matches the described shapes. — Small Sets (6–8 Items)

- 1) Express the moons as a fraction of the entire set.



==  
==

- 2) Express the moons as a fraction of the entire set.



==  
==

- 3) Express the moons as a fraction of the entire set.



==  
==

- 4) Express the moons as a fraction of the entire set.



==  
==

- 5) Express the triangles as a fraction of the entire set.



==  
==

- 6) Express the squares as a fraction of the entire set.



==  
==

- 7) Express the pentagons as a fraction of the entire set.




==  
==

- 8) Express the triangles as a fraction of the entire set.




==  
==

- 9) Express the moons as a fraction of the entire set.



==  
==

- 10) Express the circles as a fraction of the entire set.



==  
==

- 11) Express the pentagons as a fraction of the entire set.



==  
==

- 12) Express the hearts as a fraction of the entire set.



==  
==



## Answer Key

1)  $\frac{3}{7}$

4)  $\frac{5}{7}$

7)  $\frac{5}{7}$

10)  $\frac{4}{7}$

2)  $\frac{5}{8}$

5)  $\frac{4}{7}$

8)  $\frac{2}{6}$

11)  $\frac{3}{6}$

3)  $\frac{3}{7}$

6)  $\frac{3}{6}$

9)  $\frac{2}{7}$

12)  $\frac{2}{8}$

