

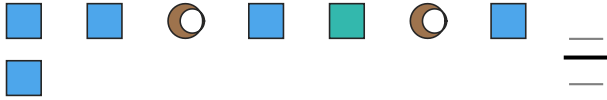
Fraction of a Whole

Name: _____

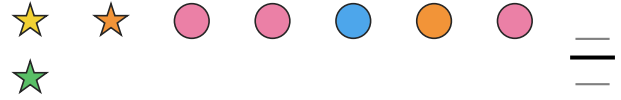
Date: _____

Write the fraction of the set that matches the described shapes. — Small Sets (6–8 Items)


- 1) Express the moons as a fraction of the entire set.



- 2) Express the stars as a fraction of the entire set.



- 3) Express the circles as a fraction of the entire set.



- 4) Express the moons as a fraction of the entire set.



- 5) Express the pentagons as a fraction of the entire set.



- 6) Express the circles as a fraction of the entire set.



- 7) Express the stars as a fraction of the entire set.




- 8) Express the pentagons as a fraction of the entire set.




- 9) Express the circles as a fraction of the entire set.



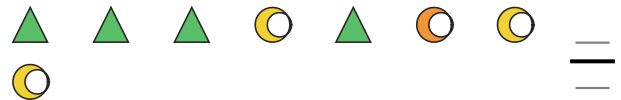
- 10) Express the hearts as a fraction of the entire set.



- 11) Express the hearts as a fraction of the entire set.



- 12) Express the triangles as a fraction of the entire set.





Answer Key

1) $\frac{2}{8}$

4) $\frac{4}{8}$

7) $\frac{2}{7}$

10) $\frac{5}{7}$

2) $\frac{3}{8}$

5) $\frac{5}{8}$

8) $\frac{2}{7}$

11) $\frac{5}{8}$

3) $\frac{1}{7}$

6) $\frac{4}{8}$

9) $\frac{3}{6}$

12) $\frac{4}{8}$

