

Fraction of a Whole

Name: _____

Date: _____

Write the fraction of the set that matches the described shapes. — Medium Sets (8–10 Items)

- 1) Express the circles as a fraction of the entire set.



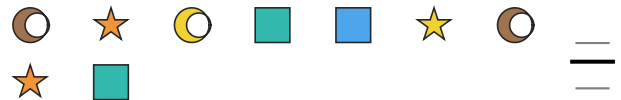
- 2) Express the stars as a fraction of the entire set.




- 3) Express the hearts as a fraction of the entire set.



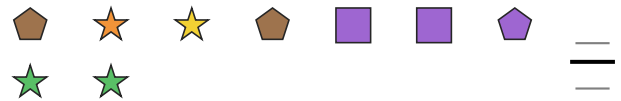
- 4) Express the stars as a fraction of the entire set.



- 5) Express the squares as a fraction of the entire set.



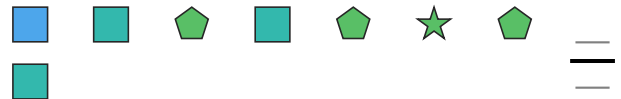
- 6) Express the stars as a fraction of the entire set.



- 7) Express the pentagons as a fraction of the entire set.



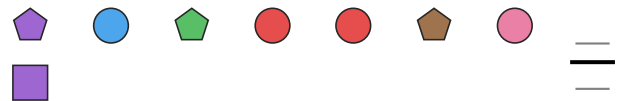
- 8) Express the squares as a fraction of the entire set.



- 9) Express the stars as a fraction of the entire set.




- 10) Express the pentagons as a fraction of the entire set.



- 11) Express the circles as a fraction of the entire set.



- 12) Express the circles as a fraction of the entire set.





Answer Key

1) $\frac{3}{8}$

4) $\frac{3}{9}$

7) $\frac{5}{9}$

10) $\frac{3}{8}$

2) $\frac{2}{9}$

5) $\frac{6}{10}$

8) $\frac{4}{8}$

11) $\frac{1}{8}$

3) $\frac{3}{8}$

6) $\frac{4}{9}$

9) $\frac{3}{8}$

12) $\frac{2}{10}$

