


# Fraction of a Whole

Name: \_\_\_\_\_


Date: \_\_\_\_\_

Write the fraction of the set that matches the described shapes. — Medium Sets (8–10 Items)


- 1) Express the pentagons as a fraction of the entire set.



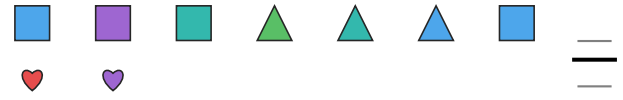
- 2) Express the pentagons as a fraction of the entire set.



- 3) Express the circles as a fraction of the entire set.



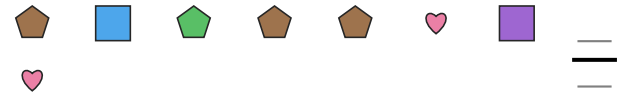
- 4) Express the squares as a fraction of the entire set.




- 5) Express the circles as a fraction of the entire set.



- 6) Express the pentagons as a fraction of the entire set.



- 7) Express the squares as a fraction of the entire set.



- 8) Express the pentagons as a fraction of the entire set.



- 9) Express the pentagons as a fraction of the entire set.




- 10) Express the stars as a fraction of the entire set.



- 11) Express the triangles as a fraction of the entire set.



- 12) Express the squares as a fraction of the entire set.





## Answer Key

1)  $\frac{4}{9}$

4)  $\frac{4}{9}$

7)  $\frac{3}{10}$

10)  $\frac{2}{9}$

2)  $\frac{4}{10}$

5)  $\frac{3}{8}$

8)  $\frac{3}{10}$

11)  $\frac{2}{10}$

3)  $\frac{4}{10}$

6)  $\frac{4}{8}$

9)  $\frac{2}{10}$

12)  $\frac{3}{10}$

