

Fraction of a Whole

Name: _____

Date: _____

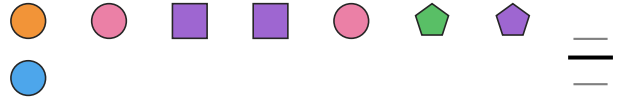
Write the fraction of the set that matches the described shapes. — Medium Sets (8–10 Items)

- 1) Express the circles as a fraction of the entire set.



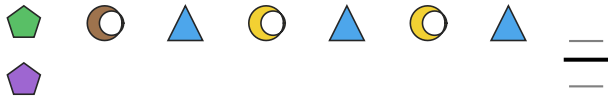
==
==

- 2) Express the pentagons as a fraction of the entire set.



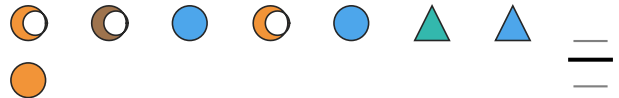
==
==

- 3) Express the pentagons as a fraction of the entire set.



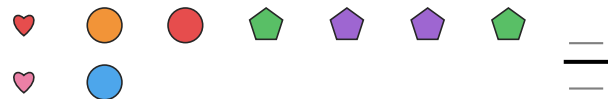
==
==

- 4) Express the moons as a fraction of the entire set.



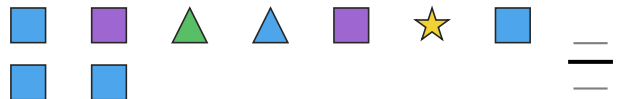
==
==

- 5) Express the circles as a fraction of the entire set.



==
==

- 6) Express the squares as a fraction of the entire set.



==
==

- 7) Express the stars as a fraction of the entire set.



==
==

- 8) Express the moons as a fraction of the entire set.




==
==

- 9) Express the circles as a fraction of the entire set.




==
==

- 10) Express the triangles as a fraction of the entire set.



==
==

- 11) Express the hearts as a fraction of the entire set.



==
==

- 12) Express the stars as a fraction of the entire set.



==
==



Answer Key

1) $\frac{3}{9}$

4) $\frac{3}{8}$

7) $\frac{3}{10}$

10) $\frac{1}{10}$

2) $\frac{2}{8}$

5) $\frac{3}{9}$

8) $\frac{4}{10}$

11) $\frac{1}{10}$

3) $\frac{2}{8}$

6) $\frac{6}{9}$

9) $\frac{1}{9}$

12) $\frac{3}{9}$

