

Fraction of a Whole

Name: _____

Date: _____

Write the fraction of the set that matches the described shapes. — Larger Sets (10–14 Items)


- 1) Express the stars as a fraction of the entire set.



- 2) Express the pentagons as a fraction of the entire set.



- 3) Express the hearts as a fraction of the entire set.




- 4) Express the squares as a fraction of the entire set.



- 5) Express the triangles as a fraction of the entire set.



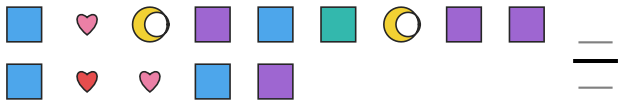
- 6) Express the hearts as a fraction of the entire set.



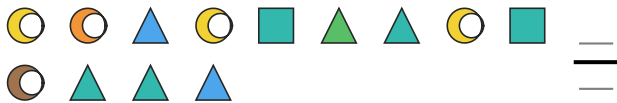
- 7) Express the squares as a fraction of the entire set.




- 8) Express the moons as a fraction of the entire set.



- 9) Express the moons as a fraction of the entire set.



- 10) Express the squares as a fraction of the entire set.



- 11) Express the squares as a fraction of the entire set.



- 12) Express the stars as a fraction of the entire set.





Answer Key

1) $2/12$

4) $3/12$

7) $2/11$

10) $2/12$

2) $4/11$

5) $3/14$

8) $2/14$

11) $2/12$

3) $3/14$

6) $4/12$

9) $5/13$

12) $1/10$

