

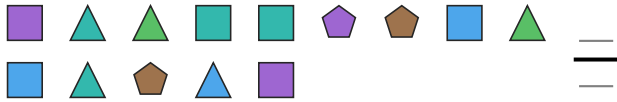
Fraction of a Whole

Name: _____


Date: _____

Write the fraction of the set that matches the described shapes. — Larger Sets (10–14 Items)

- 1) Express the triangles as a fraction of the entire set.



- 2) Express the squares as a fraction of the entire set.




- 3) Express the stars as a fraction of the entire set.



- 4) Express the pentagons as a fraction of the entire set.



- 5) Express the pentagons as a fraction of the entire set.




- 6) Express the squares as a fraction of the entire set.



- 7) Express the triangles as a fraction of the entire set.



- 8) Express the pentagons as a fraction of the entire set.



- 9) Express the triangles as a fraction of the entire set.



- 10) Express the triangles as a fraction of the entire set.



- 11) Express the moons as a fraction of the entire set.



- 12) Express the triangles as a fraction of the entire set.





Answer Key

1) $5/14$

4) $3/10$

7) $3/14$

10) $1/10$

2) $3/11$

5) $3/10$

8) $3/11$

11) $4/10$

3) $4/14$

6) $6/14$

9) $2/10$

12) $3/10$

