


# Fraction of a Whole

Name: \_\_\_\_\_


Date: \_\_\_\_\_

Write the fraction of the set that matches the described shapes. — Larger Sets (10–14 Items)


- 1) Express the moons as a fraction of the entire set.



- 2) Express the hearts as a fraction of the entire set.




- 3) Express the triangles as a fraction of the entire set.




- 4) Express the squares as a fraction of the entire set.



- 5) Express the circles as a fraction of the entire set.



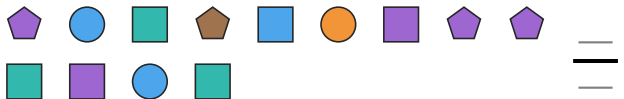
- 6) Express the squares as a fraction of the entire set.



- 7) Express the circles as a fraction of the entire set.



- 8) Express the pentagons as a fraction of the entire set.



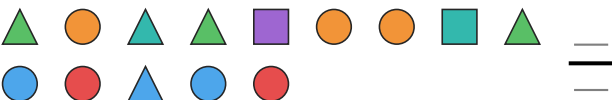
- 9) Express the moons as a fraction of the entire set.



- 10) Express the hearts as a fraction of the entire set.



- 11) Express the squares as a fraction of the entire set.



- 12) Express the triangles as a fraction of the entire set.





## Answer Key

1)  $2/12$

4)  $1/12$

7)  $3/11$

10)  $1/11$

2)  $4/11$

5)  $1/11$

8)  $4/13$

11)  $2/14$

3)  $1/11$

6)  $2/11$

9)  $1/11$

12)  $4/11$

