

Fraction of a Whole

Name: _____

Date: _____

Write the fraction of the set that matches the described shapes. — Large Sets (12–18 Items)

- 1) Express the triangles as a fraction of the entire set.



- 2) Express the triangles as a fraction of the entire set.



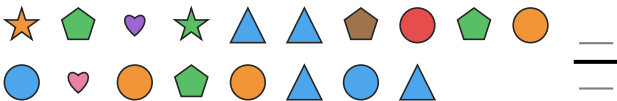
- 3) Express the moons as a fraction of the entire set.



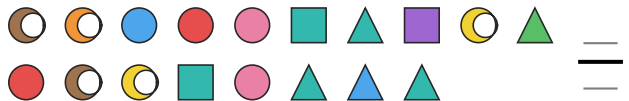
- 4) Express the stars as a fraction of the entire set.




- 5) Express the pentagons as a fraction of the entire set.




- 6) Express the squares as a fraction of the entire set.




- 7) Express the stars as a fraction of the entire set.



- 8) Express the moons as a fraction of the entire set.




- 9) Express the circles as a fraction of the entire set.



- 10) Express the hearts as a fraction of the entire set.



- 11) Express the squares as a fraction of the entire set.



- 12) Express the squares as a fraction of the entire set.





Answer Key

1) $4/14$

4) $3/13$

7) $3/15$

10) $3/13$

2) $3/13$

5) $4/18$

8) $4/12$

11) $3/16$

3) $4/17$

6) $3/18$

9) $3/18$

12) $4/18$

