

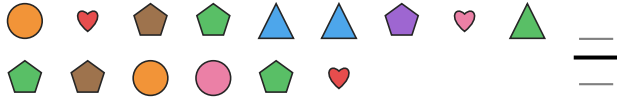
# Fraction of a Whole

Name: \_\_\_\_\_

Date: \_\_\_\_\_

Write the fraction of the set that matches the described shapes. — Large Sets (12–18 Items)


- 1) Express the triangles as a fraction of the entire set.



- 2) Express the pentagons as a fraction of the entire set.




- 3) Express the moons as a fraction of the entire set.




- 4) Express the pentagons as a fraction of the entire set.



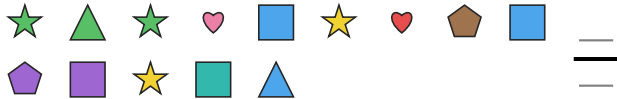
- 5) Express the stars as a fraction of the entire set.



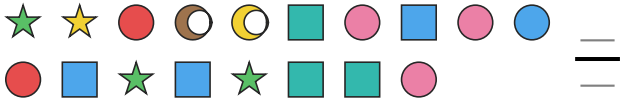
- 6) Express the triangles as a fraction of the entire set.



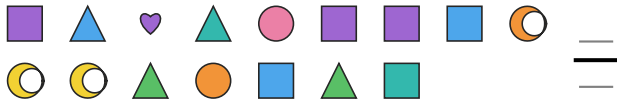
- 7) Express the stars as a fraction of the entire set.



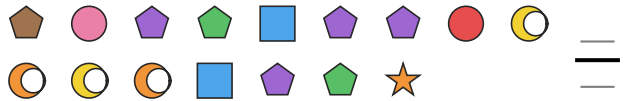
- 8) Express the squares as a fraction of the entire set.




- 9) Express the moons as a fraction of the entire set.




- 10) Express the moons as a fraction of the entire set.



- 11) Express the squares as a fraction of the entire set.



- 12) Express the moons as a fraction of the entire set.





## Answer Key

1)  $\frac{3}{15}$

4)  $\frac{4}{18}$

7)  $\frac{4}{14}$

10)  $\frac{4}{16}$

2)  $\frac{2}{12}$

5)  $\frac{3}{12}$

8)  $\frac{6}{18}$

11)  $\frac{1}{12}$

3)  $\frac{2}{15}$

6)  $\frac{7}{14}$

9)  $\frac{3}{16}$

12)  $\frac{3}{12}$

