

Fraction of a Whole

Name: _____

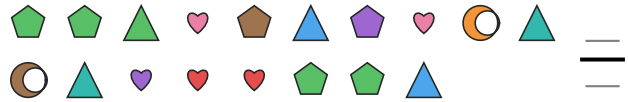
Date: _____

Write the fraction of the set that matches the described shapes. — Large Sets (12–18 Items)


- 1) Express the pentagons as a fraction of the entire set.



- 2) Express the moons as a fraction of the entire set.




- 3) Express the moons as a fraction of the entire set.




- 4) Express the circles as a fraction of the entire set.



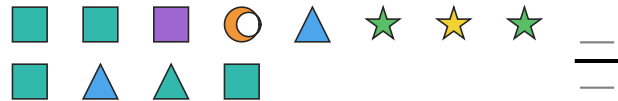
- 5) Express the hearts as a fraction of the entire set.




- 6) Express the squares as a fraction of the entire set.



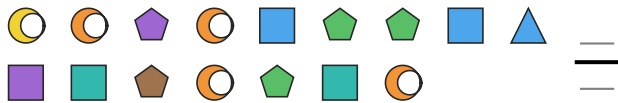
- 7) Express the squares as a fraction of the entire set.



- 8) Express the circles as a fraction of the entire set.



- 9) Express the triangles as a fraction of the entire set.



- 10) Express the moons as a fraction of the entire set.



- 11) Express the triangles as a fraction of the entire set.



- 12) Express the hearts as a fraction of the entire set.





Answer Key

1) $1/16$

4) $5/13$

7) $5/12$

10) $1/12$

2) $2/18$

5) $5/16$

8) $2/15$

11) $2/12$

3) $4/17$

6) $1/14$

9) $1/16$

12) $1/13$

