


Fraction of a Whole

Name: _____

Date: _____

Write the fraction of the set that matches the described shapes. — Large Sets (12–18 Items)

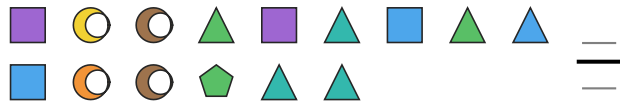
- 1) Express the squares as a fraction of the entire set.




- 2) Express the pentagons as a fraction of the entire set.



- 3) Express the squares as a fraction of the entire set.



- 4) Express the pentagons as a fraction of the entire set.



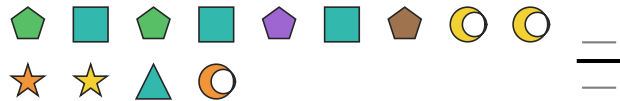
- 5) Express the moons as a fraction of the entire set.



- 6) Express the stars as a fraction of the entire set.




- 7) Express the stars as a fraction of the entire set.




- 8) Express the triangles as a fraction of the entire set.



- 9) Express the triangles as a fraction of the entire set.



- 10) Express the triangles as a fraction of the entire set.



- 11) Express the circles as a fraction of the entire set.



- 12) Express the pentagons as a fraction of the entire set.





Answer Key

1) $\frac{3}{17}$

4) $\frac{3}{13}$

7) $\frac{2}{13}$

10) $\frac{4}{18}$

2) $\frac{5}{18}$

5) $\frac{1}{12}$

8) $\frac{1}{18}$

11) $\frac{2}{13}$

3) $\frac{4}{15}$

6) $\frac{3}{15}$

9) $\frac{6}{16}$

12) $\frac{3}{18}$

