

# Identify the Fraction

Name: \_\_\_\_\_

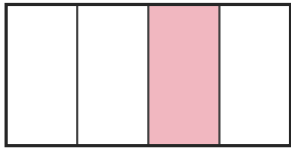
Date: \_\_\_\_\_

Circle the picture that shows each fraction. — Halves & Quarters

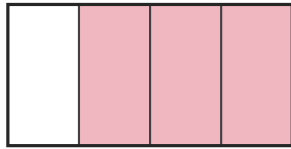
1)

$\frac{3}{4}$

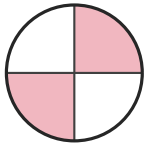
A.




B.



C.



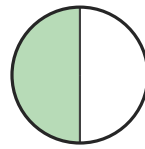
D.



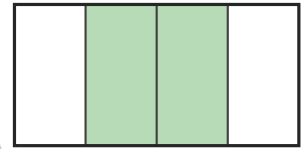
2)

$\frac{3}{4}$

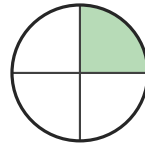
A.



B.



C.




D.



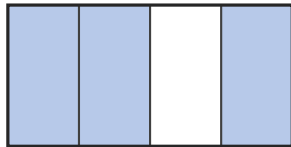
3)

$\frac{2}{4}$

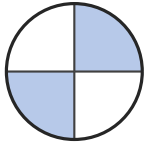
A.



B.



C.



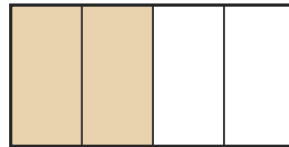
D.



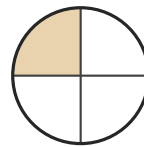
4)

$\frac{3}{4}$

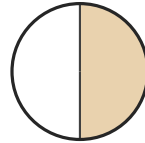
A.



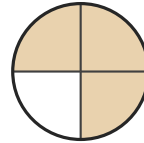
B.



C.



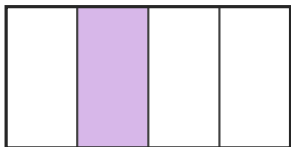
D.



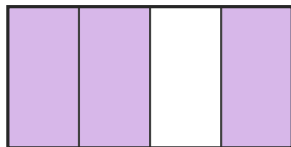
5)

$\frac{3}{4}$

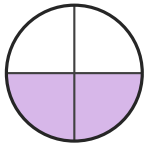
A.



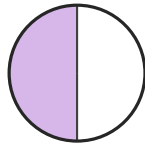
B.



C.




D.




6)

$\frac{1}{4}$


A.



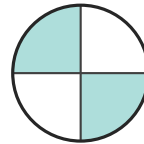
B.



C.



D.





## Answer Key

1) B. (3/4)

2) D. (3/4)

3) C. (2/4)

4) D. (3/4)

5) B. (3/4)

6) A. (1/4)

