

Identify the Fraction

Name: _____

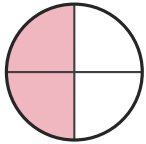
Date: _____

Circle the picture that shows each fraction. — Halves & Quarters

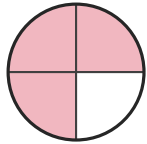
1)

$\frac{3}{4}$

A.



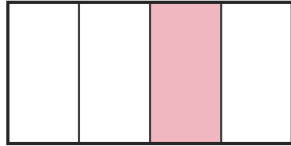
B.



C.



D.



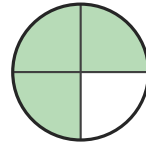
2)

$\frac{2}{4}$


A.



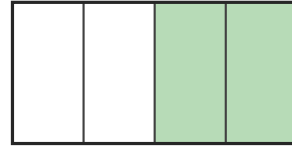
B.



C.



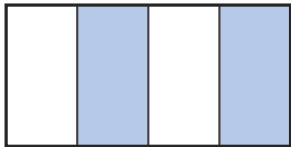
D.



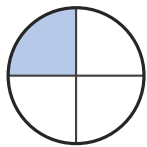
3)

$\frac{1}{2}$


A.



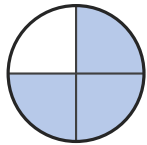
B.



C.



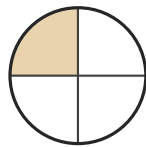
D.



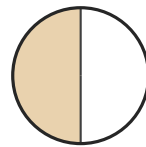
4)

$\frac{1}{4}$

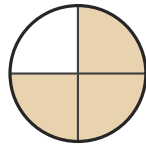
A.



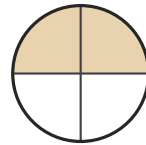
B.



C.



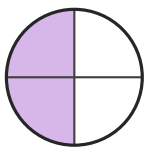
D.



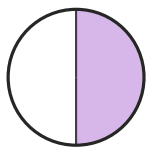
5)

$\frac{3}{4}$


A.



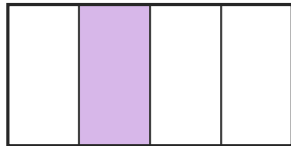
B.



C.



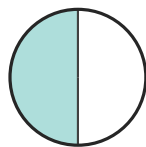
D.



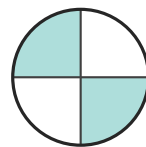
6)

$\frac{2}{4}$

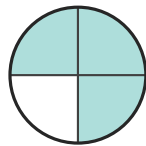
A.



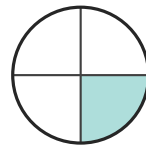
B.



C.



D.





Answer Key

1) B. (3/4)

2) D. (2/4)

3) C. (1/2)

4) A. (1/4)

5) C. (3/4)

6) B. (2/4)

