

Identify the Fraction

Name: _____

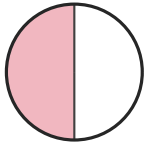
Date: _____

Circle the picture that shows each fraction. — Halves & Quarters


1)

$\frac{1}{4}$

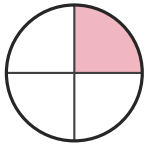
A.




B.



C.




D.



2)

$\frac{1}{2}$

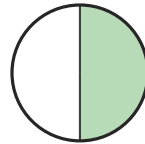
A.



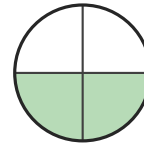
B.



C.



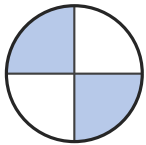
D.



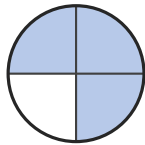
3)

$\frac{1}{2}$

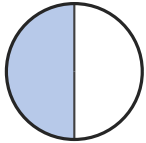
A.



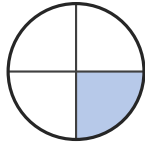
B.



C.



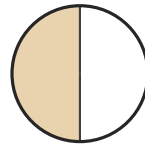
D.




4)

$\frac{3}{4}$

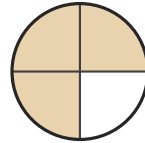
A.



B.



C.



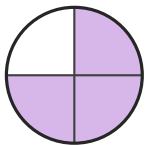
D.




5)

$\frac{2}{4}$

A.



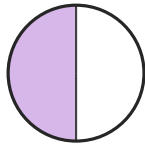
B.



C.




D.




6)

$\frac{2}{4}$

A.




B.



C.



D.





Answer Key

1) C. $(1/4)$

2) C. $(1/2)$

3) C. $(1/2)$

4) C. $(3/4)$

5) B. $(2/4)$

6) D. $(2/4)$

