

Identify the Fraction

Name: _____

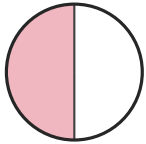
Date: _____

Circle the picture that shows each fraction. — Halves, Thirds & Quarters


1)

$$\frac{2}{3}$$


A.



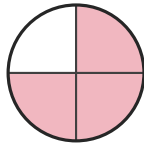
B.



C.



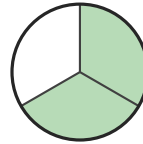
D.



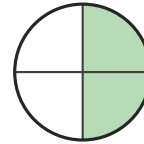
2)

$$\frac{2}{3}$$


A.



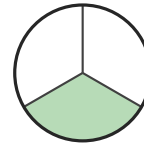
B.



C.



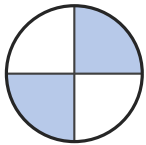
D.



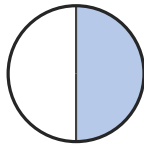
3)

$$\frac{3}{4}$$

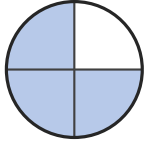
A.



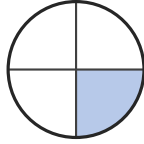
B.



C.




D.




4)

$$\frac{2}{4}$$


A.



B.



C.




D.




5)

$$\frac{1}{3}$$

A.



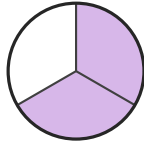
B.



C.



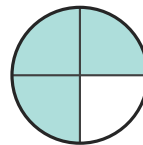
D.



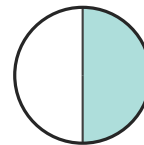
6)

$$\frac{3}{4}$$


A.



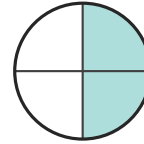
B.



C.



D.





Answer Key

1) C. (2/3)

2) A. (2/3)

3) C. (3/4)

4) D. (2/4)

5) A. (1/3)

6) A. (3/4)