

# Identify the Fraction

Name: \_\_\_\_\_

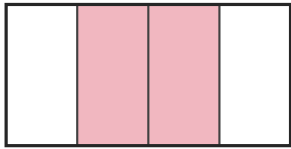
Date: \_\_\_\_\_

Circle the picture that shows each fraction. — Halves, Thirds & Quarters

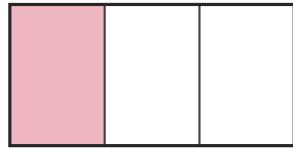
1)

$\frac{2}{4}$

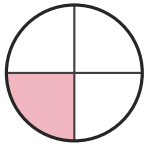
A.



B.



C.



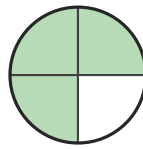
D.



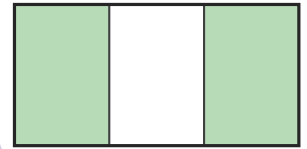
2)

$\frac{1}{4}$

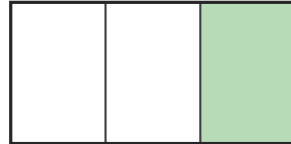
A.



B.



C.




D.



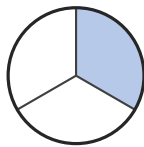
3)

$\frac{1}{3}$

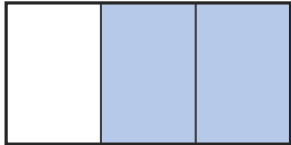
A.



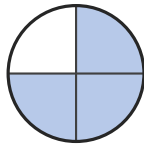
B.



C.



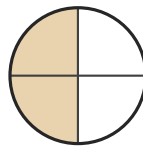
D.



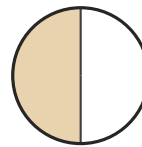
4)

$\frac{2}{4}$

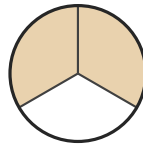
A.




B.



C.



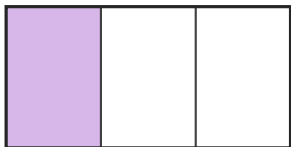
D.



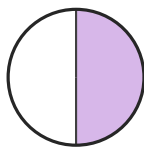
5)

$\frac{1}{2}$

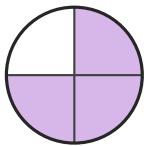
A.



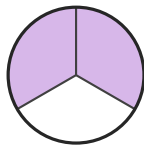
B.



C.



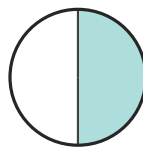
D.




6)

$\frac{1}{2}$


A.




B.



C.



D.





## Answer Key

1) A. (2/4)

2) D. (1/4)

3) B. (1/3)

4) A. (2/4)

5) B. (1/2)

6) A. (1/2)