

Identify the Fraction

Name: _____

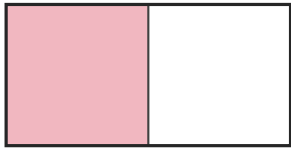
Date: _____

Circle the picture that shows each fraction. — Halves, Thirds & Quarters

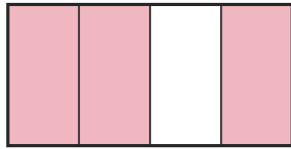
1)

$$\frac{3}{4}$$

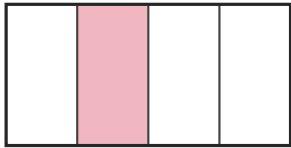
A.



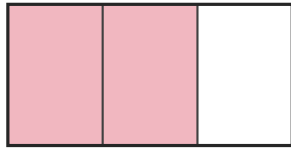
B.



C.




D.



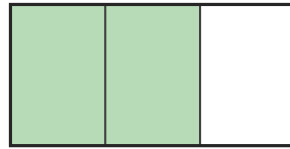
2)

$$\frac{2}{4}$$

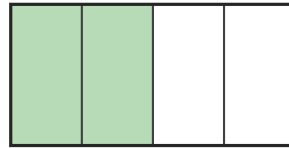
A.



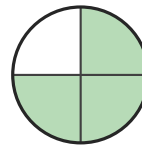
B.



C.



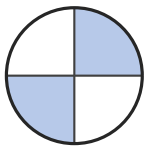
D.



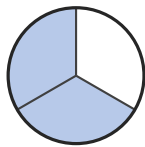
3)

$$\frac{2}{4}$$

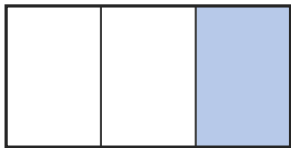
A.



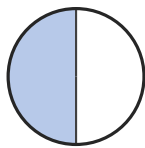
B.



C.




D.




4)

$$\frac{2}{3}$$

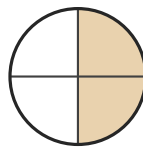
A.



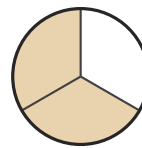
B.



C.



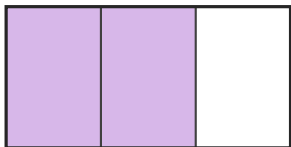
D.



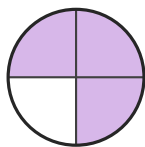
5)

$$\frac{3}{4}$$

A.



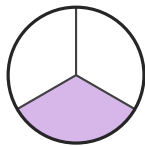
B.



C.




D.




6)

$$\frac{2}{3}$$


A.



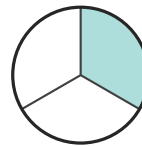
B.



C.



D.





Answer Key

1) B. (3/4)

2) C. (2/4)

3) A. (2/4)

4) D. (2/3)

5) B. (3/4)

6) A. (2/3)