

Identify the Fraction

Name: _____


Date: _____

Circle the picture that shows each fraction. — Halves, Thirds & Quarters

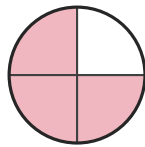
1)

$\frac{1}{3}$

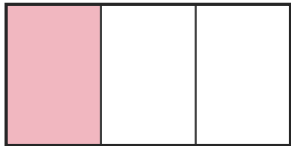
A.




B.



C.



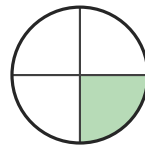
D.



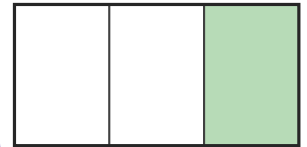
2)

$\frac{1}{4}$


A.




B.



C.



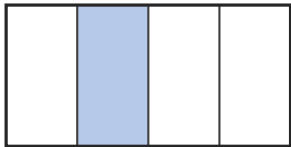
D.



3)

$\frac{1}{4}$


A.



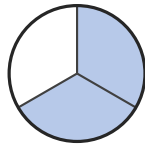
B.



C.



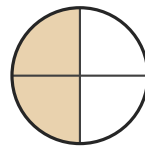
D.




4)

$\frac{3}{4}$

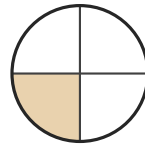
A.




B.



C.



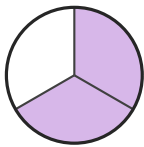
D.



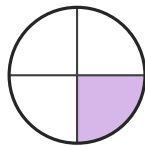
5)

$\frac{1}{4}$

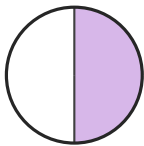
A.



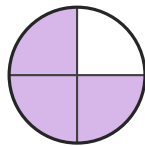
B.



C.




D.




6)

$\frac{1}{3}$

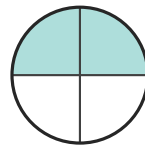
A.



B.



C.



D.





Answer Key

1) C. (1/3)

2) A. (1/4)

3) A. (1/4)

4) D. (3/4)

5) B. (1/4)

6) A. (1/3)