

Identify the Fraction

Name: _____

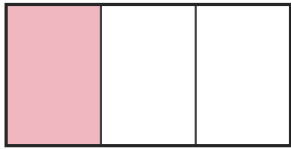
Date: _____

Circle the picture that shows each fraction. — Halves, Thirds & Quarters

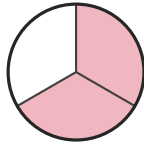
1)

$\frac{1}{3}$

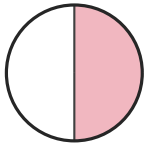
A.



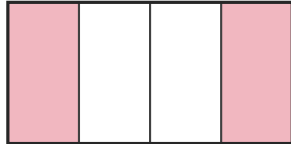
B.



C.



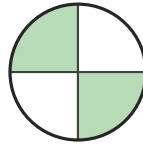
D.




2)

$\frac{2}{3}$

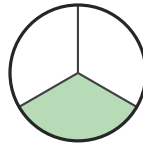
A.



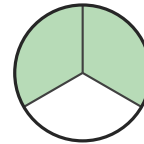
B.



C.




D.



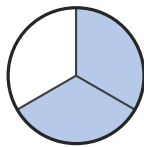
3)

$\frac{2}{4}$

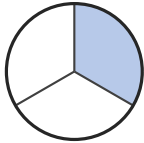
A.




B.



C.



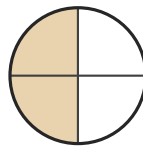
D.



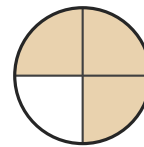
4)

$\frac{1}{3}$

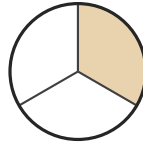
A.



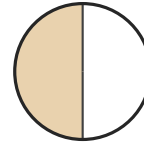
B.



C.



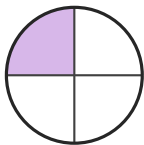
D.



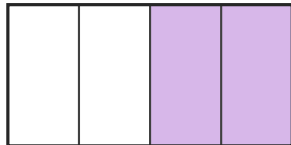
5)

$\frac{2}{4}$

A.



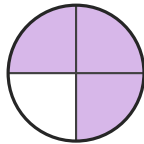
B.



C.



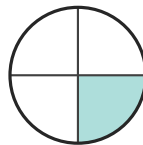
D.



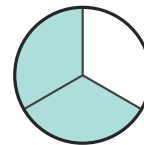
6)

$\frac{1}{4}$

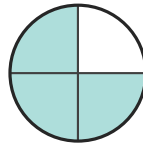
A.



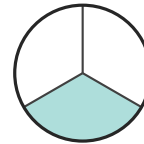
B.



C.



D.





Answer Key

1) A. $(1/3)$

2) D. $(2/3)$

3) D. $(2/4)$

4) C. $(1/3)$

5) B. $(2/4)$

6) A. $(1/4)$

