


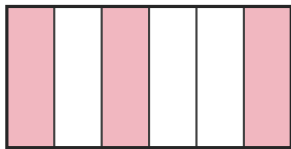
Identify the Fraction


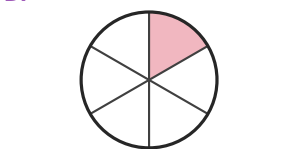
Name: _____

Date: _____

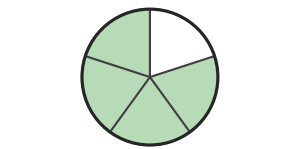
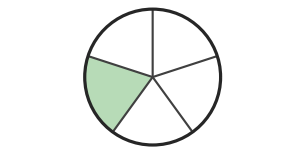
Circle the picture that shows each fraction. — Up to Sixths

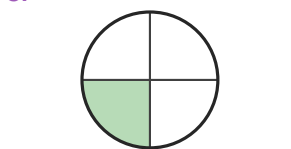

1) $\frac{3}{6}$

A.  B. 

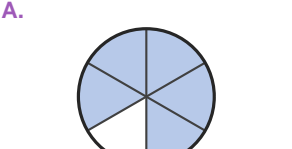
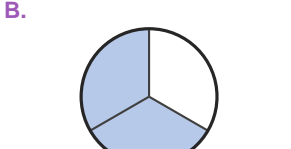
C.  D. 



2) $\frac{2}{4}$

A.  B. 

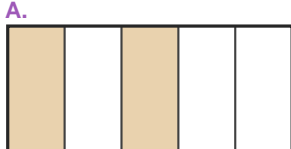

C.  D. 

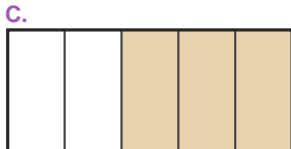
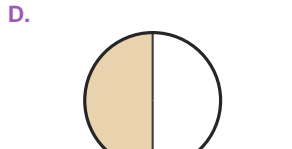
3) $\frac{4}{6}$

A.  B. 

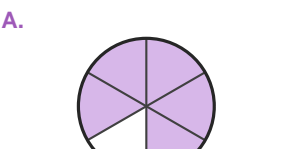
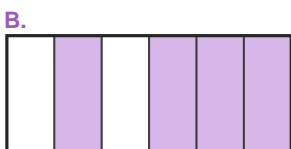
C.  D. 

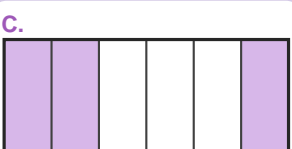
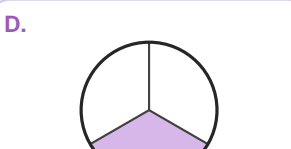
4) $\frac{2}{5}$

A.  B. 

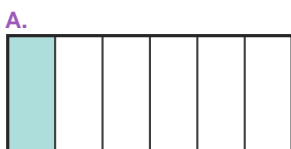

C.  D. 

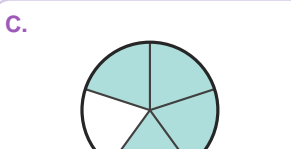
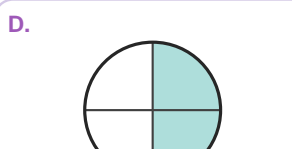
5) $\frac{4}{6}$

A.  B. 

C.  D. 

6) $\frac{2}{5}$

A.  B. 

C.  D. 



Answer Key

1) B. (3/6)

2) D. (2/4)

3) D. (4/6)

4) A. (2/5)

5) B. (4/6)

6) B. (2/5)

