

# Identify the Fraction

Name: \_\_\_\_\_

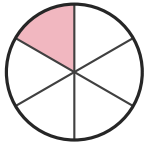
Date: \_\_\_\_\_

Circle the picture that shows each fraction. — Up to Sixths


1)

$$\frac{1}{6}$$

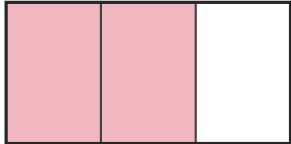
A.




B.



C.



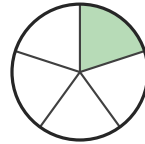
D.



2)

$$\frac{2}{5}$$

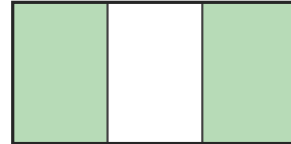
A.




B.



C.



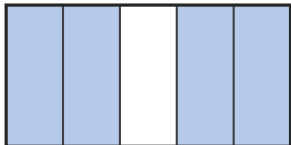
D.



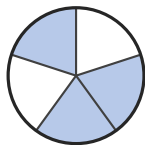
3)

$$\frac{3}{5}$$

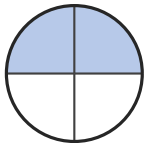
A.




B.



C.



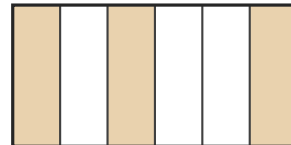
D.




4)

$$\frac{3}{4}$$


A.



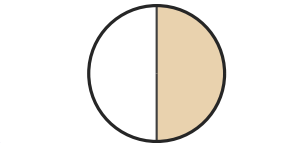
B.



C.




D.




5)

$$\frac{1}{3}$$

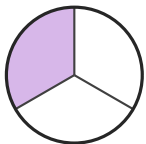
A.




B.



C.



D.




6)

$$\frac{4}{5}$$

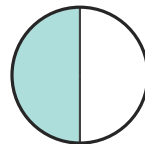
A.



B.



C.



D.





## Answer Key

1) A.  $(1/6)$

2) B.  $(2/5)$

3) B.  $(3/5)$

4) C.  $(3/4)$

5) C.  $(1/3)$

6) A.  $(4/5)$