

Identify the Fraction

Name: _____

Date: _____

Circle the picture that shows each fraction. — Up to Sixths

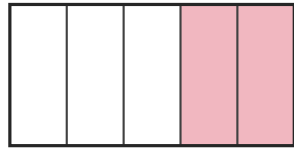
1)

$$\frac{3}{6}$$

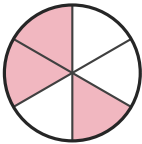
A.



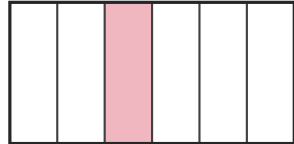
B.



C.



D.



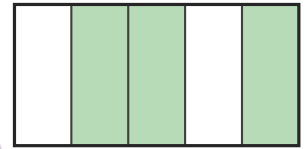
2)

$$\frac{3}{5}$$

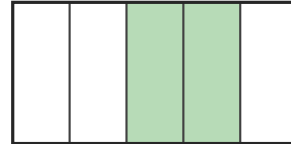
A.



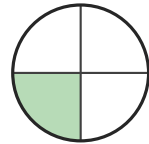
B.



C.



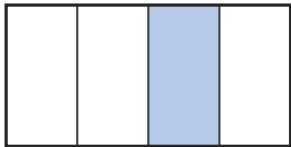
D.



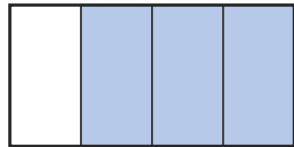
3)

$$\frac{3}{4}$$

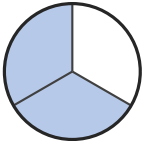
A.




B.



C.



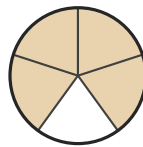
D.



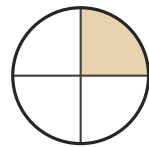
4)

$$\frac{3}{6}$$


A.



B.



C.



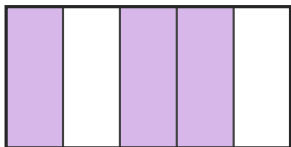
D.



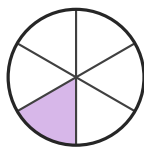
5)

$$\frac{3}{5}$$

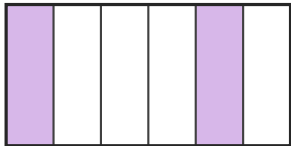
A.



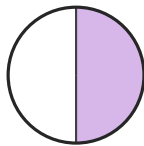
B.



C.



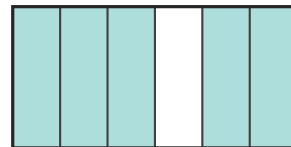
D.



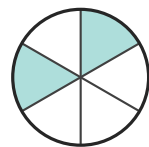
6)

$$\frac{3}{4}$$


A.



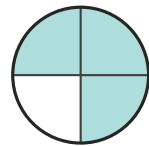
B.



C.



D.





Answer Key

1) C. (3/6)

2) B. (3/5)

3) B. (3/4)

4) C. (3/6)

5) A. (3/5)

6) D. (3/4)