


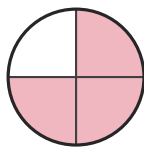
Identify the Fraction

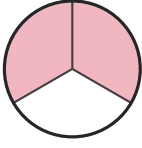
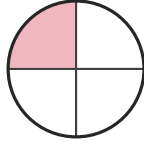
Name: _____

Date: _____

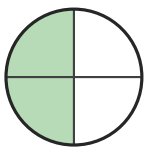
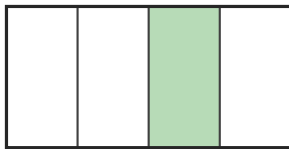
Circle the picture that shows each fraction. — Up to Sixths

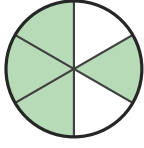
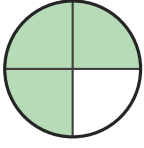
1) $\frac{2}{3}$

A.  B. 

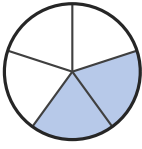
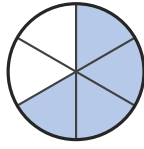
C.  D. 

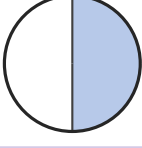
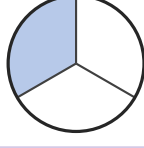
2) $\frac{4}{6}$

A.  B. 

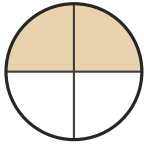

C.  D. 

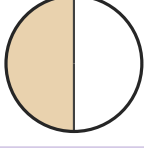

3) $\frac{4}{6}$

A.  B. 

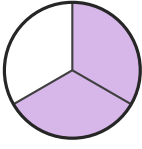
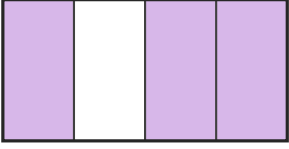
C.  D. 


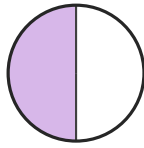
4) $\frac{2}{5}$

A.  B. 



C.  D. 


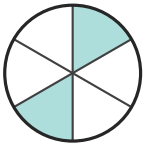
5) $\frac{2}{3}$

A.  B. 

C.  D. 

6) $\frac{1}{5}$

A.  B. 

C.  D. 



Answer Key

1) C. ($\frac{2}{3}$)

2) C. ($\frac{4}{6}$)

3) B. ($\frac{4}{6}$)

4) D. ($\frac{2}{5}$)

5) A. ($\frac{2}{3}$)

6) B. ($\frac{1}{5}$)

