

Identify the Fraction

Name: _____

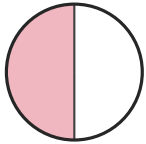
Date: _____

Circle the picture that shows each fraction. — Up to Eighths

1)

$$\frac{3}{8}$$

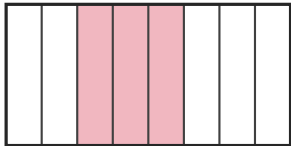
A.



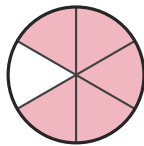
B.



C.



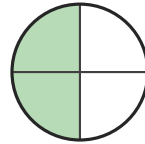
D.



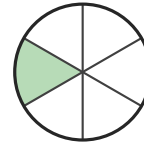
2)

$$\frac{4}{5}$$

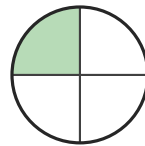
A.



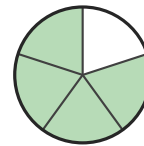
B.



C.



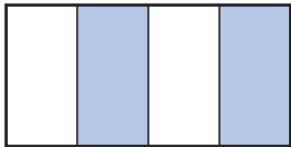
D.



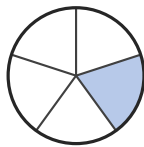
3)

$$\frac{2}{4}$$

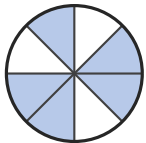
A.




B.



C.



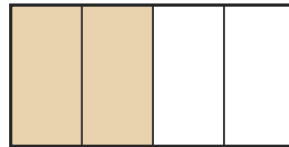
D.



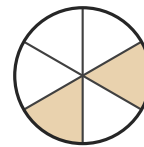
4)

$$\frac{1}{3}$$

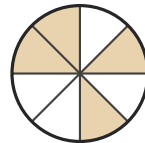
A.



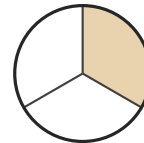
B.



C.



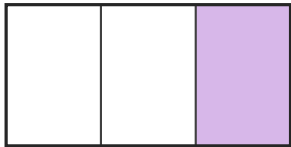
D.



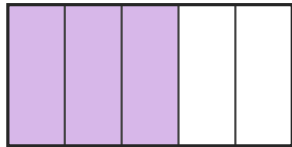
5)

$$\frac{3}{5}$$

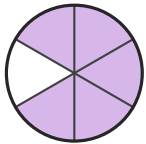
A.



B.



C.



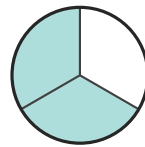
D.



6)

$$\frac{1}{8}$$

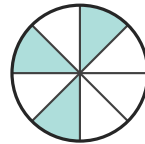
A.



B.



C.



D.





Answer Key

1) C. $(\frac{3}{8})$

2) D. $(\frac{4}{5})$

3) A. $(\frac{2}{4})$

4) D. $(\frac{1}{3})$

5) B. $(\frac{3}{5})$

6) D. $(\frac{1}{8})$