

Identify the Fraction

Name: _____

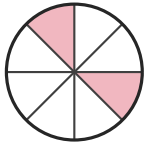
Date: _____

Circle the picture that shows each fraction. — Up to Eighths

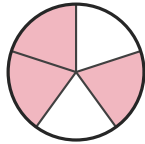
1)

$\frac{2}{8}$

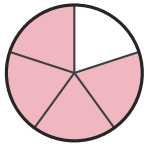
A.



B.



C.



D.



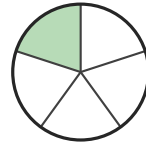
2)

$\frac{1}{3}$

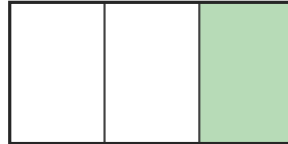
A.



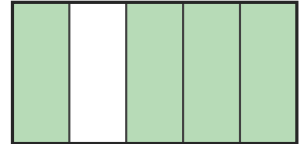
B.



C.



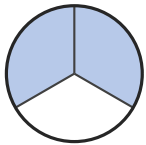
D.



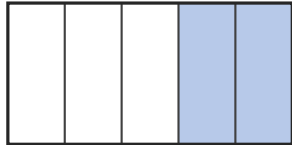
3)

$\frac{1}{8}$

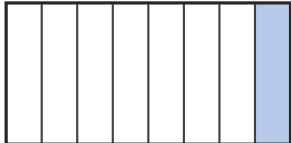
A.



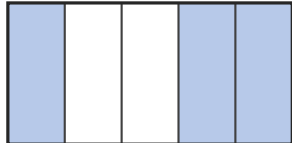
B.



C.



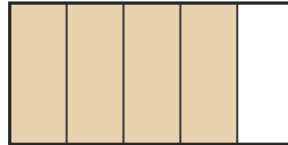
D.



4)

$\frac{3}{8}$

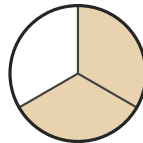
A.



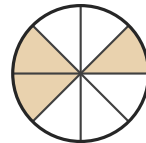
B.



C.



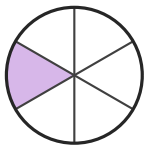
D.



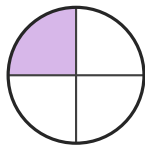
5)

$\frac{1}{6}$

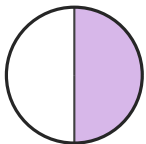
A.




B.



C.



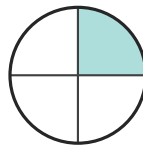
D.



6)

$\frac{1}{6}$

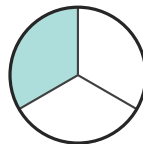
A.



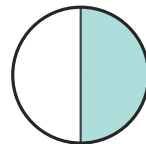
B.



C.



D.





Answer Key

1) A. $(\frac{2}{8})$

2) C. $(\frac{1}{3})$

3) C. $(\frac{1}{8})$

4) D. $(\frac{3}{8})$

5) A. $(\frac{1}{6})$

6) B. $(\frac{1}{6})$