

# Identify the Fraction

Name: \_\_\_\_\_

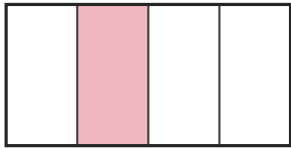
Date: \_\_\_\_\_

Circle the picture that shows each fraction. — Up to Eighths

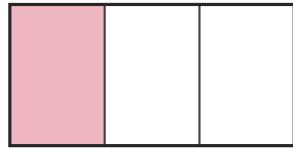
1)

$$\frac{3}{4}$$

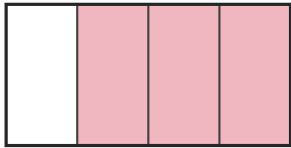
A.



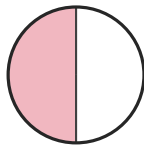
B.



C.



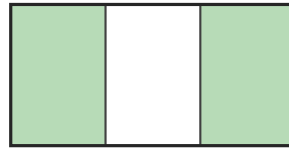
D.



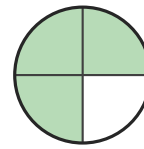
2)

$$\frac{5}{8}$$

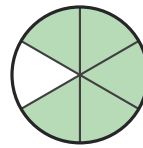
A.



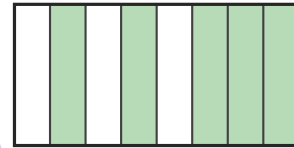
B.



C.



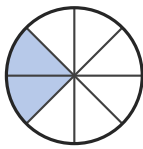
D.



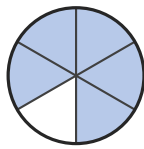
3)

$$\frac{5}{6}$$

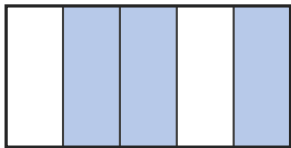
A.



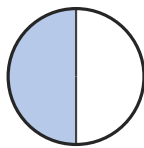
B.



C.



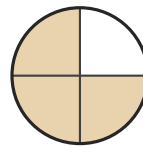
D.



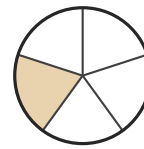
4)

$$\frac{5}{6}$$

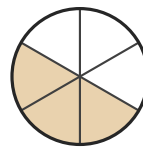
A.



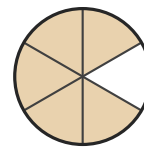
B.



C.



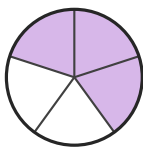
D.



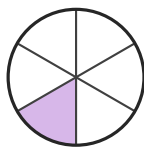
5)

$$\frac{3}{4}$$

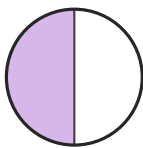
A.




B.



C.



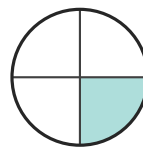
D.



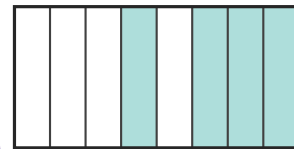
6)

$$\frac{1}{4}$$

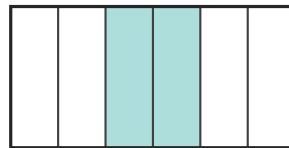
A.



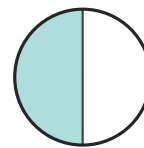
B.



C.



D.





## Answer Key

1) C.  $(\frac{3}{4})$

2) D.  $(\frac{5}{8})$

3) B.  $(\frac{5}{6})$

4) D.  $(\frac{5}{6})$

5) D.  $(\frac{3}{4})$

6) A.  $(\frac{1}{4})$