

Identify the Fraction

Name: _____

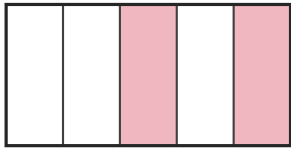
Date: _____

Circle the picture that shows each fraction. — Up to Eighths

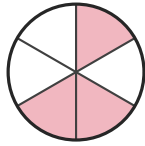
1)

$$\frac{3}{6}$$

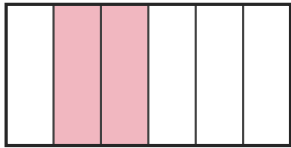
A.



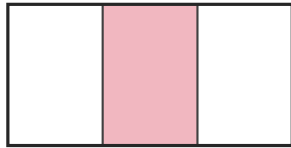
B.



C.



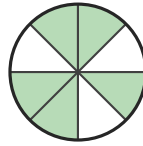
D.




2)

$$\frac{5}{6}$$

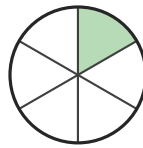
A.



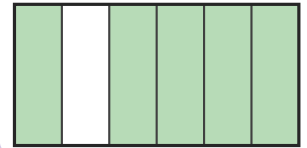
B.



C.



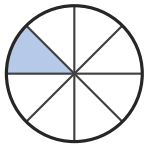
D.



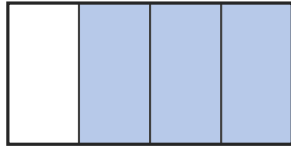
3)

$$\frac{1}{3}$$

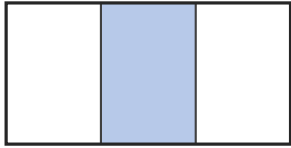
A.



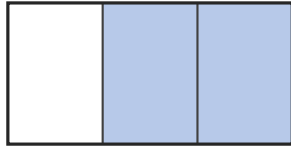
B.



C.



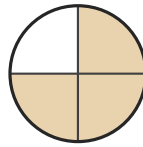
D.



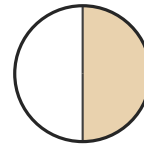
4)

$$\frac{1}{4}$$


A.



B.



C.



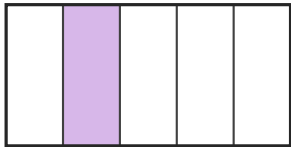
D.



5)

$$\frac{2}{6}$$

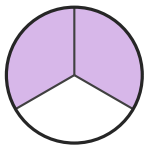
A.



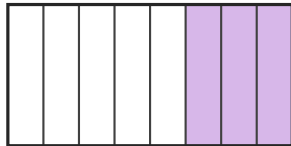
B.



C.




D.



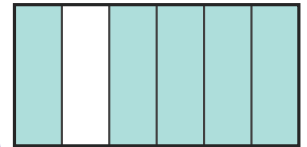
6)

$$\frac{1}{5}$$

A.



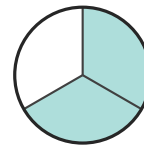
B.



C.



D.





Answer Key

1) B. ($\frac{3}{6}$)

2) D. ($\frac{5}{6}$)

3) C. ($\frac{1}{3}$)

4) C. ($\frac{1}{4}$)

5) B. ($\frac{2}{6}$)

6) C. ($\frac{1}{5}$)

