

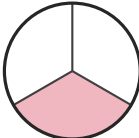
# Identify the Fraction


Name: \_\_\_\_\_


Date: \_\_\_\_\_

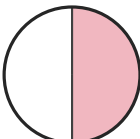
Circle the picture that shows each fraction. — Up to Eighths

1)  $\frac{3}{5}$

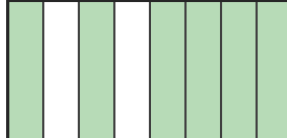
A. 


B. 


C. 


D. 

2)  $\frac{3}{4}$

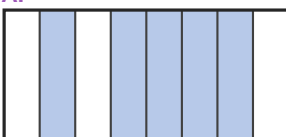
A. 


B. 

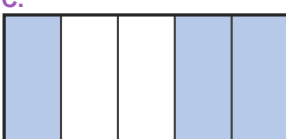
C. 


D. 

3)  $\frac{5}{8}$

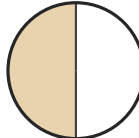
A. 


B. 

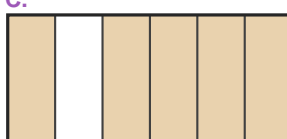
C. 

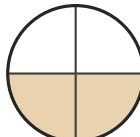
D. 

4)  $\frac{2}{3}$

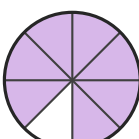
A. 

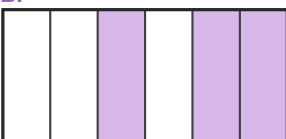
B. 

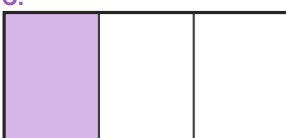
C. 

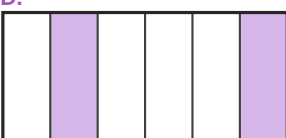
D. 

5)  $\frac{3}{6}$

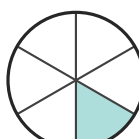
A. 

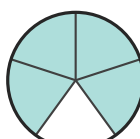
B. 


C. 

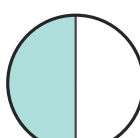
D. 

6)  $\frac{3}{5}$

A. 

B. 

C. 

D. 



## Answer Key

1) C.  $(\frac{3}{5})$

2) C.  $(\frac{3}{4})$

3) A.  $(\frac{5}{8})$

4) B.  $(\frac{2}{3})$

5) B.  $(\frac{3}{6})$

6) C.  $(\frac{3}{5})$