

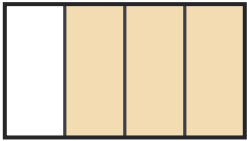
# Name the Fraction

Name: \_\_\_\_\_

Date: \_\_\_\_\_

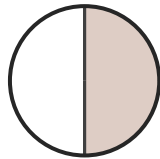
Circle the correct name for each shaded fraction. — Halves & Quarters

1)



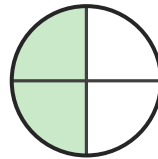
- A. three-quarters
- B. two-quarters
- C. one-quarter

2)



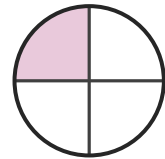
- A. one-half
- B. three-quarters
- C. two-quarters

3)



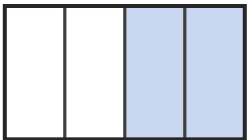
- A. one-half
- B. one-quarter
- C. two-quarters

4)



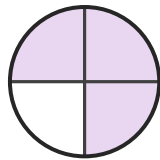
- A. one-half
- B. one-quarter
- C. three-quarters

5)



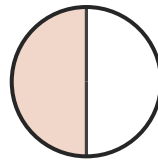
- A. one-quarter
- B. two-quarters
- C. one-half

6)



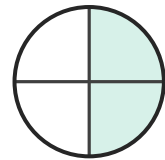
- A. one-quarter
- B. two-quarters
- C. three-quarters

7)



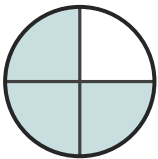
- A. three-quarters
- B. one-half
- C. one-quarter

8)



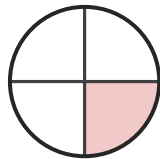
- A. one-quarter
- B. three-quarters
- C. two-quarters

9)



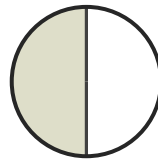
- A. two-quarters
- B. three-quarters
- C. one-quarter

10)



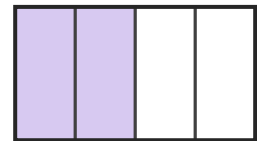
- A. three-quarters
- B. one-quarter
- C. one-half

11)



- A. one-half
- B. two-quarters
- C. one-quarter

12)



- A. one-half
- B. two-quarters
- C. three-quarters





## Answer Key

1) A. three-quarters

4) B. one-quarter

7) B. one-half

10) B. one-quarter

2) A. one-half

5) B. two-quarters

8) C. two-quarters

11) A. one-half

3) C. two-quarters

6) C. three-quarters

9) B. three-quarters

12) B. two-quarters

