

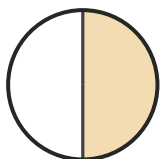
Name the Fraction

Name: _____

Date: _____

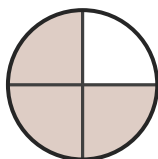
Circle the correct name for each shaded fraction. — Halves & Quarters

1)




- A. three-quarters
- B. one-half
- C. one-quarter

2)



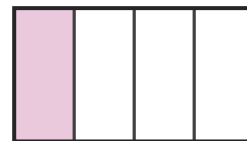
- A. one-quarter
- B. two-quarters
- C. three-quarters

3)



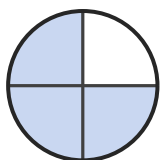
- A. one-half
- B. three-quarters
- C. two-quarters

4)




- A. three-quarters
- B. one-quarter
- C. one-half

5)




- A. three-quarters
- B. one-quarter
- C. two-quarters

6)



- A. one-half
- B. three-quarters
- C. two-quarters

7)




- A. one-half
- B. three-quarters
- C. two-quarters

8)



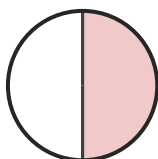
- A. one-quarter
- B. two-quarters
- C. three-quarters

9)



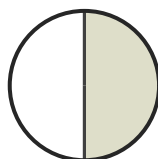
- A. three-quarters
- B. one-half
- C. two-quarters

10)



- A. two-quarters
- B. one-half
- C. three-quarters

11)



- A. one-half
- B. two-quarters
- C. one-quarter

12)



- A. one-quarter
- B. three-quarters
- C. one-half





Answer Key

- | | | |
|-------------------|----------------------|--------------------|
| 1) B. one-half | 2) C. three-quarters | 3) C. two-quarters |
| 4) B. one-quarter | 5) A. three-quarters | 6) A. one-half |
| 7) A. one-half | 8) B. two-quarters | 9) B. one-half |
| 10) B. one-half | 11) A. one-half | 12) C. one-half |