


Name the Fraction

Name: _____

Date: _____

Circle the correct name for each shaded fraction. — Halves & Quarters

1)



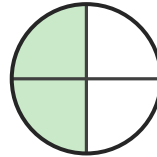
- A. one-half
- B. two-quarters
- C. three-quarters

2)



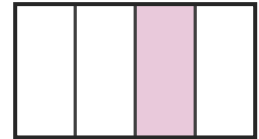
- A. two-quarters
- B. three-quarters
- C. one-half

3)




- A. one-half
- B. two-quarters
- C. three-quarters

4)




- A. three-quarters
- B. one-half
- C. one-quarter

5)



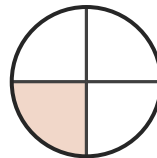
- A. three-quarters
- B. one-half
- C. two-quarters

6)




- A. three-quarters
- B. one-quarter
- C. one-half

7)



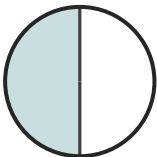
- A. two-quarters
- B. one-half
- C. one-quarter

8)




- A. two-quarters
- B. three-quarters
- C. one-half

9)



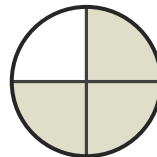
- A. three-quarters
- B. one-half
- C. two-quarters

10)



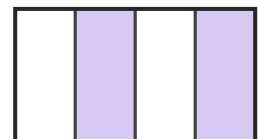
- A. one-half
- B. three-quarters
- C. one-quarter

11)



- A. two-quarters
- B. one-quarter
- C. three-quarters

12)



- A. two-quarters
- B. one-half
- C. one-quarter





Answer Key

- | | | |
|-------------------|-----------------------|----------------------|
| 1) A. one-half | 2) B. three-quarters | 3) B. two-quarters |
| 4) C. one-quarter | 5) B. one-half | 6) A. three-quarters |
| 7) C. one-quarter | 8) C. one-half | 9) B. one-half |
| 10) A. one-half | 11) C. three-quarters | 12) A. two-quarters |