

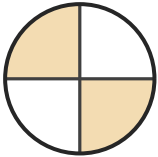
Name the Fraction

Name: _____

Date: _____

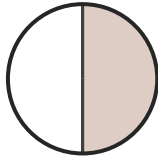
Circle the correct name for each shaded fraction. — Halves & Quarters

1)



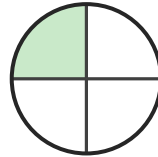
- A. one-quarter
- B. three-quarters
- C. two-quarters

2)



- A. three-quarters
- B. one-quarter
- C. one-half

3)



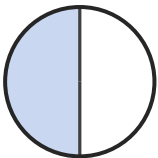
- A. three-quarters
- B. one-quarter
- C. one-half

4)




- A. one-half
- B. one-quarter
- C. three-quarters

5)



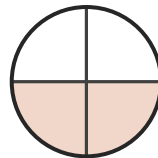
- A. one-half
- B. two-quarters
- C. three-quarters

6)



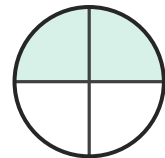
- A. one-quarter
- B. one-half
- C. two-quarters

7)



- A. two-quarters
- B. three-quarters
- C. one-half

8)



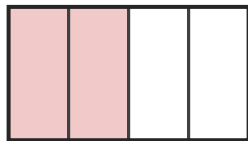
- A. one-half
- B. one-quarter
- C. two-quarters

9)



- A. one-half
- B. one-quarter
- C. two-quarters

10)



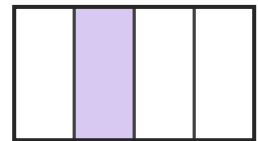
- A. three-quarters
- B. one-half
- C. two-quarters

11)



- A. one-half
- B. three-quarters
- C. two-quarters

12)



- A. two-quarters
- B. one-quarter
- C. three-quarters





Answer Key

- | | | |
|----------------------|--------------------|--------------------|
| 1) C. two-quarters | 2) C. one-half | 3) B. one-quarter |
| 4) C. three-quarters | 5) A. one-half | 6) B. one-half |
| 7) A. two-quarters | 8) C. two-quarters | 9) A. one-half |
| 10) C. two-quarters | 11) A. one-half | 12) B. one-quarter |

