

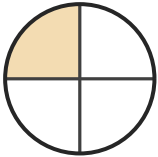
# Name the Fraction

Name: \_\_\_\_\_

Date: \_\_\_\_\_

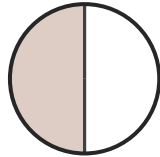
Circle the correct name for each shaded fraction. — Halves, Thirds & Quarters

1)




- A. one-quarter
- B. two-quarters
- C. one-third

2)



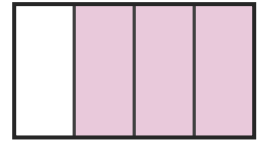
- A. one-half
- B. one-quarter
- C. three-quarters

3)



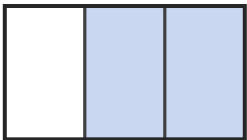
- A. one-half
- B. two-quarters
- C. one-third

4)



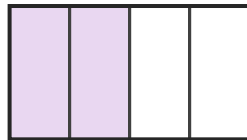
- A. three-quarters
- B. two-quarters
- C. two-thirds

5)



- A. one-half
- B. two-thirds
- C. one-quarter

6)



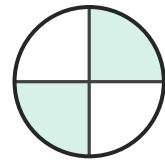
- A. two-quarters
- B. one-quarter
- C. two-thirds

7)



- A. one-half
- B. one-quarter
- C. three-quarters

8)




- A. one-third
- B. one-quarter
- C. two-quarters

9)



- A. one-quarter
- B. one-half
- C. three-quarters

10)



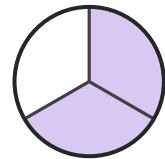
- A. two-quarters
- B. one-half
- C. one-third

11)



- A. one-third
- B. three-quarters
- C. one-quarter

12)



- A. one-third
- B. two-thirds
- C. one-half





## Answer Key

1) A. one-quarter

2) A. one-half

3) C. one-third

4) A. three-quarters

5) B. two-thirds

6) A. two-quarters

7) A. one-half

8) C. two-quarters

9) B. one-half

10) B. one-half

11) B. three-quarters

12) B. two-thirds

