

Name the Fraction

Name: _____

Date: _____

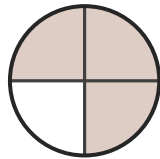
Circle the correct name for each shaded fraction. — Halves, Thirds & Quarters

1)



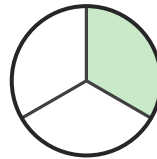
- A. one-quarter
- B. one-half
- C. three-quarters

2)



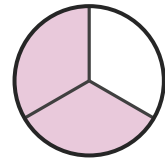
- A. two-thirds
- B. one-quarter
- C. three-quarters

3)



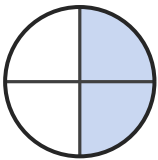
- A. two-quarters
- B. one-third
- C. two-thirds

4)



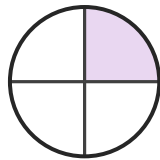
- A. one-third
- B. two-thirds
- C. three-quarters

5)



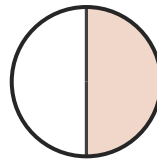
- A. two-quarters
- B. three-quarters
- C. one-third

6)




- A. one-half
- B. three-quarters
- C. one-quarter

7)




- A. one-third
- B. one-half
- C. two-thirds

8)



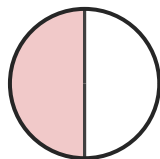
- A. one-half
- B. three-quarters
- C. one-quarter

9)



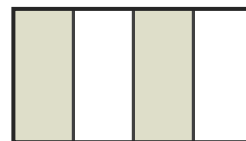
- A. three-quarters
- B. two-quarters
- C. one-third

10)




- A. one-quarter
- B. one-half
- C. two-thirds

11)



- A. three-quarters
- B. one-half
- C. two-quarters

12)



- A. one-half
- B. three-quarters
- C. one-quarter





Answer Key

- | | | |
|------------------|----------------------|-------------------|
| 1) B. one-half | 2) C. three-quarters | 3) B. one-third |
| 4) B. two-thirds | 5) A. two-quarters | 6) C. one-quarter |
| 7) B. one-half | 8) A. one-half | 9) C. one-third |
| 10) B. one-half | 11) C. two-quarters | 12) A. one-half |