

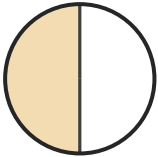
Name the Fraction

Name: _____

Date: _____


Circle the correct name for each shaded fraction. — Halves, Thirds & Quarters

1)



- A. one-half
- B. one-quarter
- C. one-third

2)



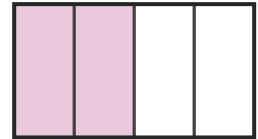
- A. one-third
- B. two-thirds
- C. two-quarters

3)



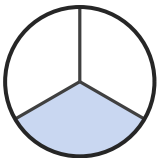
- A. three-quarters
- B. one-half
- C. one-quarter

4)




- A. one-third
- B. three-quarters
- C. two-quarters

5)



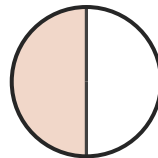
- A. one-third
- B. three-quarters
- C. two-quarters

6)




- A. two-thirds
- B. two-quarters
- C. three-quarters

7)



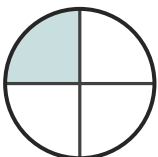
- A. one-half
- B. two-thirds
- C. three-quarters

8)




- A. two-thirds
- B. one-half
- C. one-quarter

9)




- A. one-half
- B. two-thirds
- C. one-quarter

10)



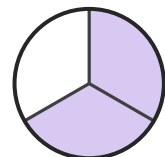
- A. one-quarter
- B. one-half
- C. two-quarters

11)



- A. one-third
- B. one-half
- C. two-quarters

12)



- A. one-quarter
- B. three-quarters
- C. two-thirds





Answer Key

- | | | |
|--------------------|-------------------|----------------------|
| 1) A. one-half | 2) B. two-thirds | 3) C. one-quarter |
| 4) C. two-quarters | 5) A. one-third | 6) C. three-quarters |
| 7) A. one-half | 8) C. one-quarter | 9) C. one-quarter |
| 10) B. one-half | 11) B. one-half | 12) C. two-thirds |