

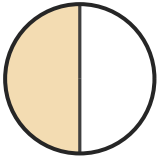
# Name the Fraction

Name: \_\_\_\_\_

Date: \_\_\_\_\_

Circle the correct name for each shaded fraction. — Halves, Thirds & Quarters

1)



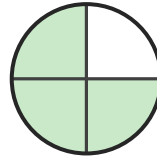
- A. one-third
- B. one-half
- C. two-quarters

2)



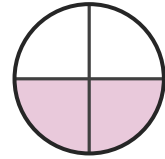
- A. one-third
- B. one-half
- C. two-quarters

3)



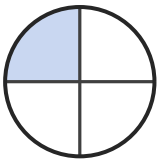
- A. one-half
- B. three-quarters
- C. one-quarter

4)



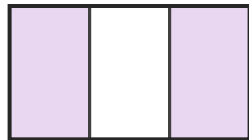
- A. two-quarters
- B. one-half
- C. three-quarters

5)



- A. one-quarter
- B. one-half
- C. three-quarters

6)



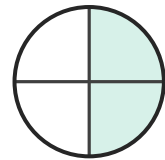
- A. one-third
- B. two-thirds
- C. one-quarter

7)



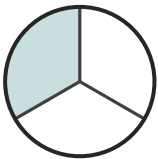
- A. one-half
- B. two-quarters
- C. two-thirds

8)



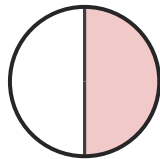
- A. two-quarters
- B. two-thirds
- C. one-third

9)



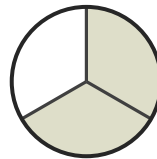
- A. one-third
- B. three-quarters
- C. one-half

10)



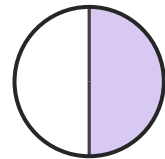
- A. one-third
- B. two-quarters
- C. one-half

11)



- A. two-thirds
- B. three-quarters
- C. one-quarter

12)



- A. two-quarters
- B. one-quarter
- C. one-half





## Answer Key

- |                    |                    |                      |
|--------------------|--------------------|----------------------|
| 1) B. one-half     | 2) A. one-third    | 3) B. three-quarters |
| 4) A. two-quarters | 5) A. one-quarter  | 6) B. two-thirds     |
| 7) A. one-half     | 8) A. two-quarters | 9) A. one-third      |
| 10) C. one-half    | 11) A. two-thirds  | 12) C. one-half      |

