

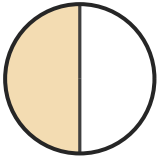
Name the Fraction

Name: _____

Date: _____

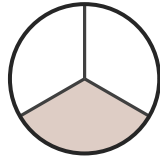
Circle the correct name for each shaded fraction. — Halves, Thirds & Quarters

1)



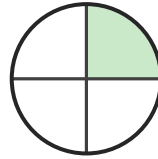
- A. three-quarters
- B. one-quarter
- C. one-half

2)



- A. one-half
- B. one-third
- C. two-thirds

3)



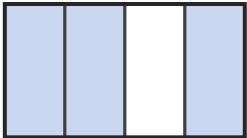
- A. one-third
- B. two-quarters
- C. one-quarter

4)




- A. two-thirds
- B. one-half
- C. one-quarter

5)




- A. three-quarters
- B. one-third
- C. two-quarters

6)



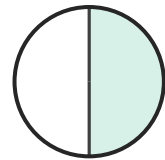
- A. two-quarters
- B. three-quarters
- C. one-third

7)



- A. two-quarters
- B. two-thirds
- C. three-quarters

8)



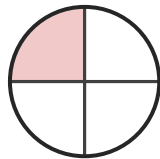
- A. one-half
- B. two-thirds
- C. three-quarters

9)



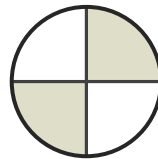
- A. one-half
- B. one-quarter
- C. two-thirds

10)



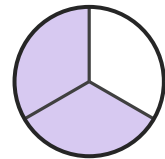
- A. one-quarter
- B. three-quarters
- C. two-quarters

11)



- A. two-thirds
- B. two-quarters
- C. one-half

12)



- A. three-quarters
- B. two-quarters
- C. two-thirds





Answer Key

1) C. one-half

2) B. one-third

3) C. one-quarter

4) A. two-thirds

5) A. three-quarters

6) A. two-quarters

7) A. two-quarters

8) A. one-half

9) A. one-half

10) A. one-quarter

11) B. two-quarters

12) C. two-thirds

