


Name the Fraction

Name: _____

Date: _____

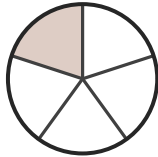
Circle the correct name for each shaded fraction. — Up to Sixths

1)



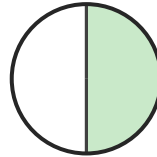
- A. three-sixths
- B. two-sixths
- C. two-thirds

2)



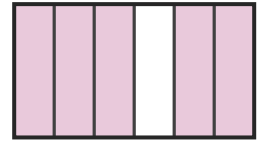
- A. two-thirds
- B. four-sixths
- C. one-fifth

3)



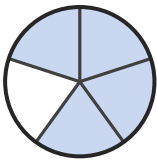
- A. one-half
- B. one-third
- C. three-fifths

4)



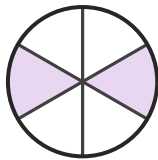
- A. five-sixths
- B. one-third
- C. three-sixths

5)



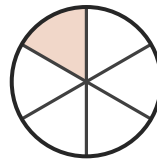
- A. one-fifth
- B. four-fifths
- C. three-sixths

6)




- A. one-sixth
- B. three-quarters
- C. two-sixths

7)



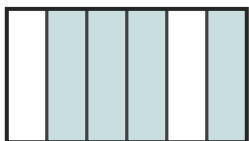
- A. one-half
- B. three-sixths
- C. one-sixth

8)



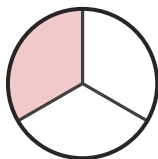
- A. five-sixths
- B. three-quarters
- C. one-half

9)



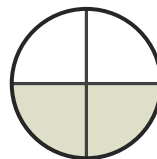
- A. four-fifths
- B. four-sixths
- C. one-quarter

10)



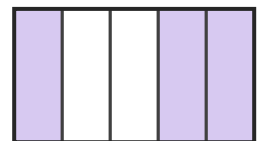
- A. one-third
- B. two-thirds
- C. three-fifths

11)



- A. two-quarters
- B. three-sixths
- C. two-sixths

12)



- A. three-fifths
- B. one-sixth
- C. two-thirds





Answer Key

1) C. two-thirds

4) A. five-sixths

7) C. one-sixth

10) A. one-third

2) C. one-fifth

5) B. four-fifths

8) B. three-quarters

11) A. two-quarters

3) A. one-half

6) C. two-sixths

9) B. four-sixths

12) A. three-fifths

