

Name the Fraction

Name: _____

Date: _____

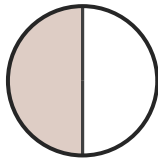
Circle the correct name for each shaded fraction. — Up to Sixths

1)



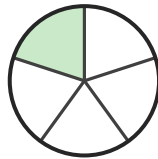
- A. one-fifth
- B. three-fifths
- C. two-fifths

2)



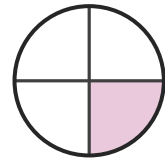
- A. one-half
- B. four-sixths
- C. two-fifths

3)



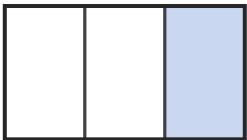
- A. three-sixths
- B. one-fifth
- C. four-sixths

4)



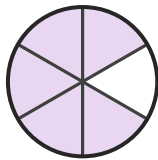
- A. one-sixth
- B. two-sixths
- C. one-quarter

5)



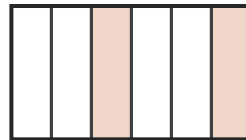
- A. three-quarters
- B. two-thirds
- C. one-third

6)



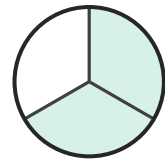
- A. four-sixths
- B. five-sixths
- C. three-fifths

7)



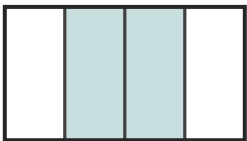
- A. one-sixth
- B. two-sixths
- C. one-half

8)



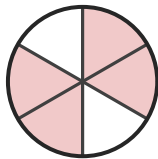
- A. two-fifths
- B. two-thirds
- C. two-quarters

9)



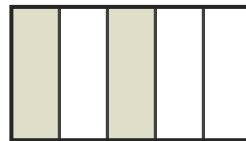
- A. four-fifths
- B. two-quarters
- C. one-third

10)



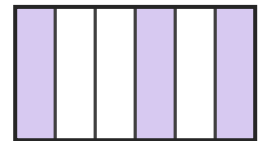
- A. two-sixths
- B. four-sixths
- C. two-quarters

11)



- A. four-fifths
- B. two-fifths
- C. three-quarters

12)



- A. one-third
- B. three-sixths
- C. two-thirds





Answer Key

1) B. three-fifths

4) C. one-quarter

7) B. two-sixths

10) B. four-sixths

2) A. one-half

5) C. one-third

8) B. two-thirds

11) B. two-fifths

3) B. one-fifth

6) B. five-sixths

9) B. two-quarters

12) B. three-sixths

