

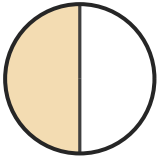
Name the Fraction

Name: _____

Date: _____

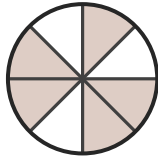
Circle the correct name for each shaded fraction. — Up to Eighths

1)



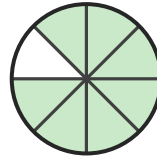
- A. one-half
- B. five-eighths
- C. one-eighth

2)



- A. two-eighths
- B. five-eighths
- C. one-half

3)



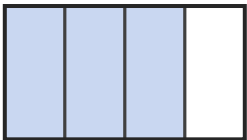
- A. three-fifths
- B. two-sixths
- C. seven-eighths

4)



- A. three-fifths
- B. four-sixths
- C. two-thirds

5)



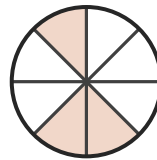
- A. three-quarters
- B. five-sixths
- C. four-fifths

6)



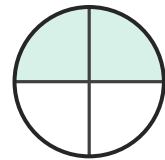
- A. two-quarters
- B. five-sixths
- C. one-sixth

7)



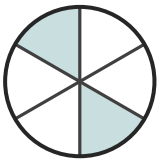
- A. two-fifths
- B. three-eighths
- C. one-fifth

8)



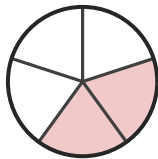
- A. one-sixth
- B. two-quarters
- C. five-sixths

9)




- A. one-half
- B. one-quarter
- C. two-sixths

10)



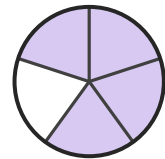
- A. two-thirds
- B. two-fifths
- C. four-fifths

11)



- A. one-third
- B. seven-eighths
- C. two-sixths

12)



- A. two-quarters
- B. one-fifth
- C. four-fifths





Answer Key

- | | | |
|---------------------|----------------------|---------------------|
| 1) A. one-half | 2) B. five-eighths | 3) C. seven-eighths |
| 4) C. two-thirds | 5) A. three-quarters | 6) C. one-sixth |
| 7) B. three-eighths | 8) B. two-quarters | 9) C. two-sixths |
| 10) B. two-fifths | 11) A. one-third | 12) C. four-fifths |

