

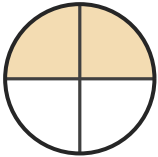
# Name the Fraction

Name: \_\_\_\_\_

Date: \_\_\_\_\_

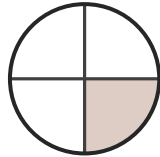
Circle the correct name for each shaded fraction. — Up to Eighths

1)



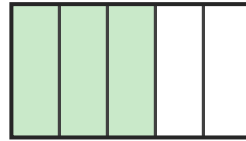
- A. three-fifths
- B. two-eighths
- C. two-quarters

2)



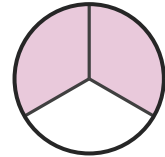
- A. one-quarter
- B. seven-eighths
- C. three-sixths

3)



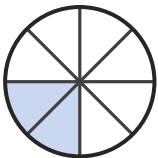
- A. three-fifths
- B. one-fifth
- C. four-fifths

4)



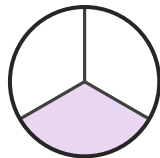
- A. one-sixth
- B. two-thirds
- C. one-eighth

5)



- A. four-fifths
- B. one-sixth
- C. two-eighths

6)



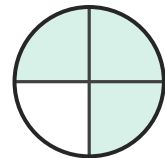
- A. six-eighths
- B. one-third
- C. one-fifth

7)



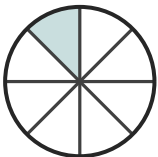
- A. seven-eighths
- B. one-sixth
- C. three-fifths

8)



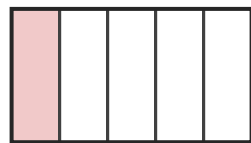
- A. three-quarters
- B. five-eighths
- C. three-sixths

9)



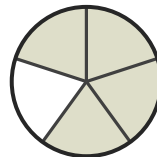
- A. four-fifths
- B. one-eighth
- C. four-sixths

10)



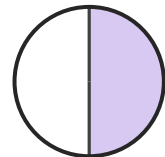
- A. three-quarters
- B. one-fifth
- C. two-eighths

11)



- A. four-fifths
- B. two-eighths
- C. one-eighth

12)



- A. one-half
- B. two-fifths
- C. one-sixth





## Answer Key

- |                    |                      |                    |
|--------------------|----------------------|--------------------|
| 1) C. two-quarters | 2) A. one-quarter    | 3) A. three-fifths |
| 4) B. two-thirds   | 5) C. two-eighths    | 6) B. one-third    |
| 7) B. one-sixth    | 8) A. three-quarters | 9) B. one-eighth   |
| 10) B. one-fifth   | 11) A. four-fifths   | 12) A. one-half    |